




Student Name: _____


Obtain Marks: _____

Subtract and Draw

Instruction: Count the objects. Write the number. Then solve the subtraction.




$$7 - 4 = \underline{\quad}$$



$$5 - 2 = \underline{\quad}$$



$$6 - 1 = \underline{\quad}$$



$$8 - 3 = \underline{\quad}$$