




Student Name: _____

Obtain Marks: _____


Cross Out and Subtract

Instruction: Cross out the objects. Write how many are left.





$$6 - 2 = \underline{\quad}$$

How many left?





$$5 - 3 = \underline{\quad}$$

How many left?




$$8 - 4 = \underline{\quad}$$

How many left?



$$9 - 3 = \underline{\quad}$$

How many left?



$$7 - 1 = \underline{\quad}$$

How many left?

