





Student Name: _____

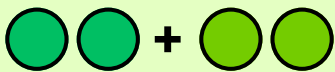
Obtain Marks: _____


Addition - Sums to 5


Instruction: Solve each Addition. Write the answer in the box.



$$2 + 1 = \square$$

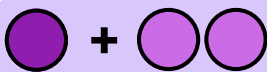

$$0 + 4 = \square$$



$$2 + 2 = \square$$



$$3 + 2 = \square$$



$$3 + 1 = \square$$



$$2 + 0 = \square$$



$$1 + 2 = \square$$


$$5 + 0 = \square$$


$$4 + 1 = \square$$


$$1 + 4 = \square$$


$$1 + 3 = \square$$


$$0 + 1 = \square$$